



## GEOGRAPHY

## Paper 4 Advanced Human Geography Options

INSERT

## INFORMATION

- This insert contains all the resources referred to in the questions.
- You may annotate this insert and use the blank spaces for planning. **Do not write your answers** on the insert.



Fig. 1.1 for Question 1

**Taxes and subsidies for agricultural producers and consumers for selected countries and the European Union (EU), 2019**

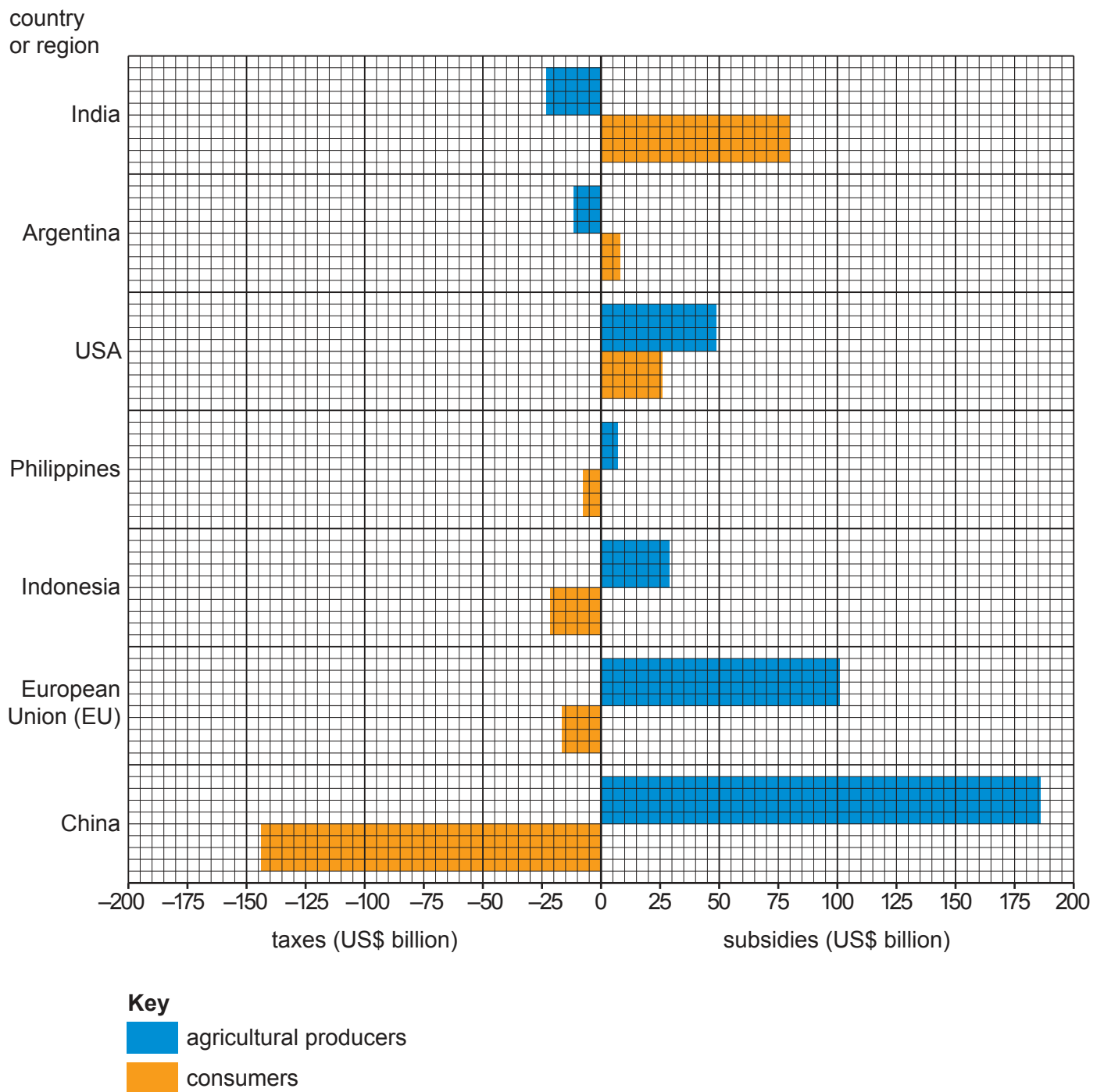
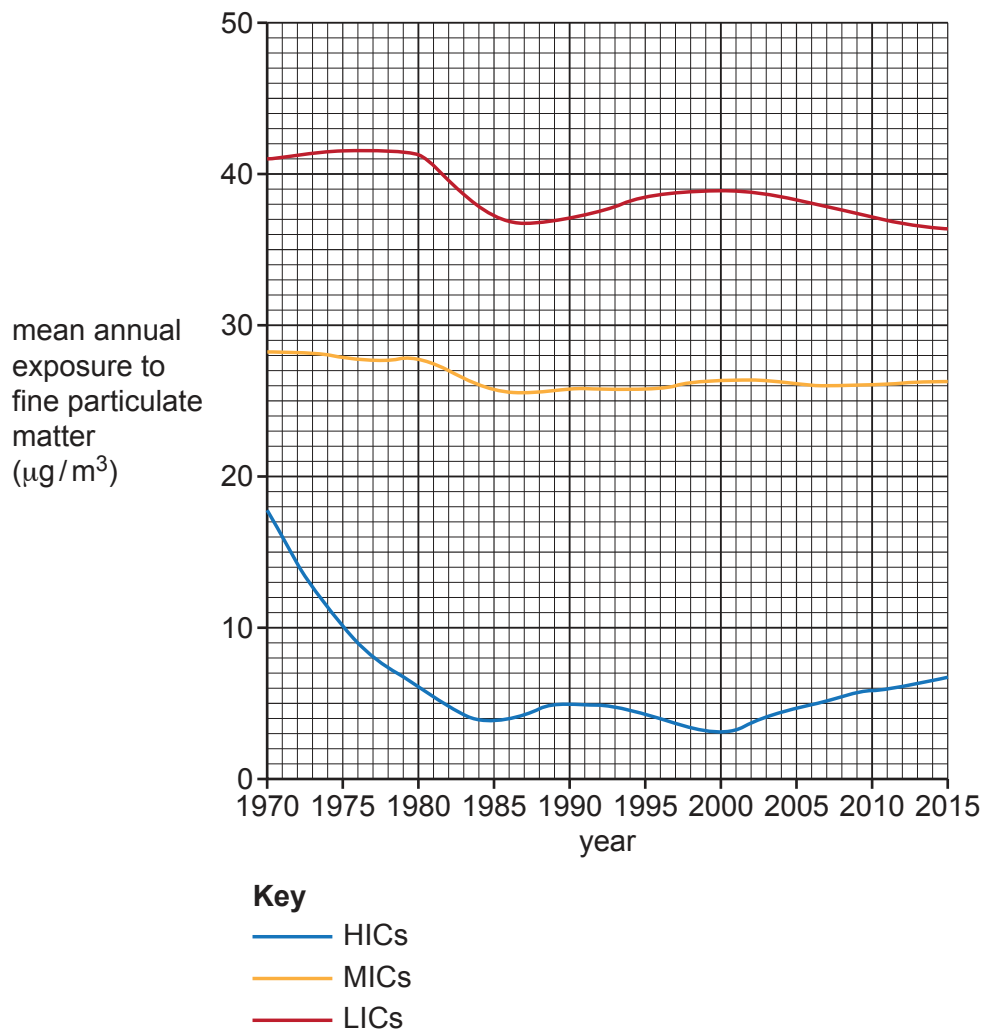


Fig. 4.1 for Question 4

Mean annual exposure to air pollution with fine particulate matter\*, by level of development, 1970–2015



\* Fine particulate matter (PM<sub>2.5</sub>) measures less than 2.5 microns in diameter and can cause significant health problems.

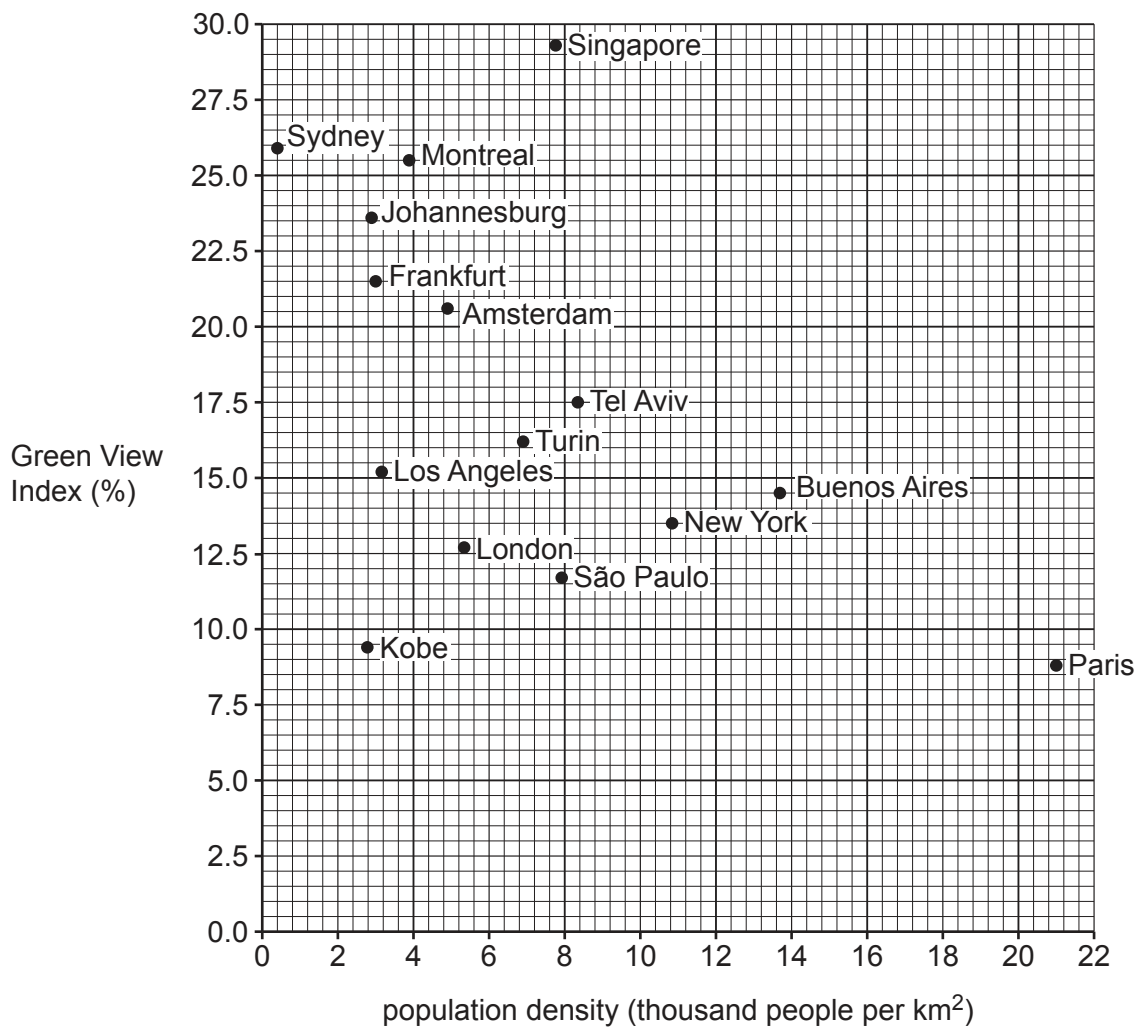
Table 7.1 for Question 7

**Some aspects of the nature and role of Fairtrade International and other similar organisations, 2016**

	<b>Coffee Circle</b>	<b>Fairtrade International</b>	<b>Rainforest Alliance</b>
<b>Type of organisation</b>	Private business	Non-profit organisation	Non-profit organisation
<b>System</b>	Verification system based on personal relationships and contact	Certification system based on Fairtrade standards	Certification system based on Rainforest Alliance standards
<b>Main focus</b>	Quality incentives Education and health	Minimum prices Social bonuses	Conservation Environmental education
<b>Social bonus given to producers</b>	US\$1.10 per kg	US\$0.43 per kg	None
<b>Admission fee paid by producers</b>	None	Approximately US\$5500 per cooperative	Approximately US\$2500 per cooperative
<b>Quality incentive</b>	High prices for high quality	Quality not taken into account in the minimum price	Primary focus is the environment and secondary focus is quality

Fig. 10.1 for Question 10

**Green View Index\* (%) and population density (km<sup>2</sup>) for selected cities, 2017**



\* Green View Index measures urban tree canopy cover from a street view (it does not include parks).

**BLANK PAGE**



**BLANK PAGE**

---

The boundaries and names shown, the designations used and the presentation of material on any maps contained in this question paper/insert do not imply official endorsement or acceptance by Cambridge Assessment International Education concerning the legal status of any country, territory, or area or any of its authorities, or of the delimitation of its frontiers or boundaries.

Permission to reproduce items where third-party owned material protected by copyright is included has been sought and cleared where possible. Every reasonable effort has been made by the publisher (UCLES) to trace copyright holders, but if any items requiring clearance have unwittingly been included, the publisher will be pleased to make amends at the earliest possible opportunity.

To avoid the issue of disclosure of answer-related information to candidates, all copyright acknowledgements are reproduced online in the Cambridge Assessment International Education Copyright Acknowledgements Booklet. This is produced for each series of examinations and is freely available to download at [www.cambridgeinternational.org](http://www.cambridgeinternational.org) after the live examination series.

Cambridge Assessment International Education is part of Cambridge Assessment. Cambridge Assessment is the brand name of the University of Cambridge Local Examinations Syndicate (UCLES), which is a department of the University of Cambridge.